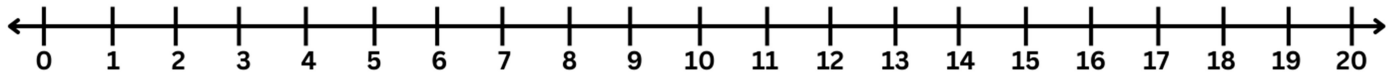


# Whole Numbers

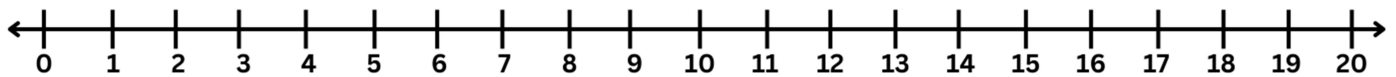
## Number line subtraction

Subtract numbers with the help of number line.

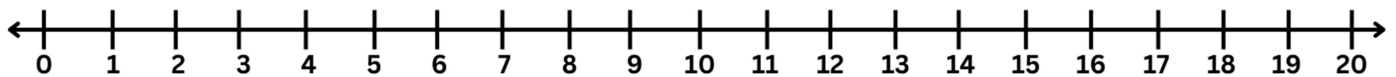
a)  $10 - 3 = \text{-----}$



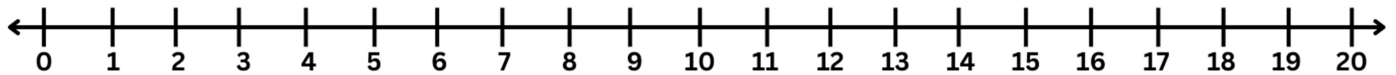
b)  $12 - 2 = \text{-----}$



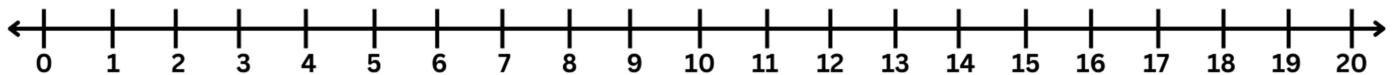
c)  $15 - 1 = \text{-----}$



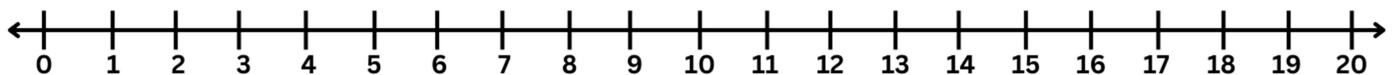
d)  $19 - 5 = \text{-----}$



e)  $8 - 6 = \text{-----}$



f)  $14 - 3 = \text{-----}$



g)  $17 - 6 = \text{-----}$

