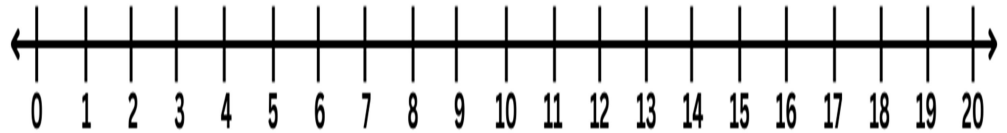


# Whole Numbers

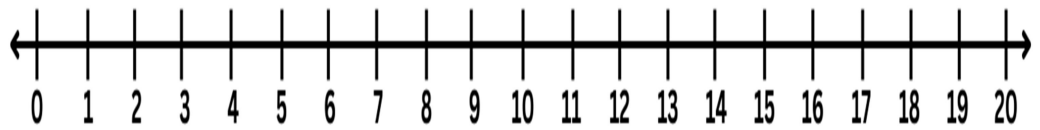
## Number line subtraction

Subtract numbers with the help of number line.

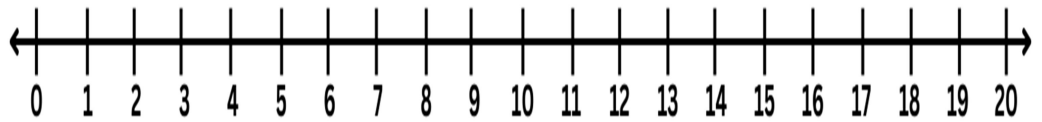
a)  $16 - 7 = \text{-----}$



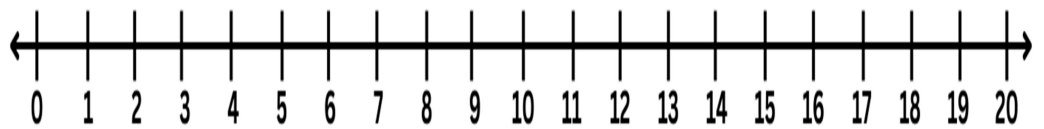
b)  $10 - 4 = \text{-----}$



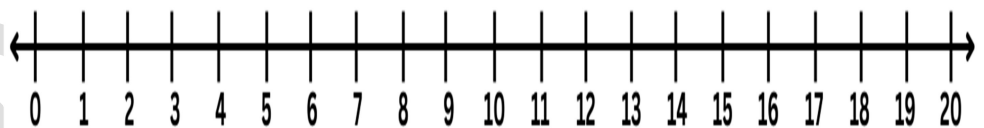
c)  $15 - 9 = \text{----}$



d)  $18 - 9 = \text{----}$



e)  $17 - 8 = \text{-----}$



f)  $8 - 5 = \text{-----}$



g)  $14 - 7 = \text{-----}$

